





























































Name:

Date:

Could you help me to find how many  there are:

| | 01 | 02 | 03 | 04 | 05 | 06 | 07 | 08 | 09 | 10 | |
|---|---|---|---|---|--|---|---|---|---|---|---|
| A |  |  |  |  |  |  |  |  |  |  | A |
| B |  |  |  |  |  |  |  |  |  |  | B |
| C |  |  |  |  |  |  |  |  |  |  | C |
| D |  |  |  |  |  |  |  |  |  |  | D |
| E |  |  |  |  |  |  |  |  |  |  | E |
| F |  |  |  |  |  |  |  |  |  |  | F |
| | 01 | 02 | 03 | 04 | 05 | 06 | 07 | 08 | 09 | 10 | |

Name:

Date:

Where did you find them?

COLUMNS

| | | | | |
|----|----|----|----|----|
| 01 | 02 | 03 | 04 | 05 |
| | | | | |
| 06 | 07 | 08 | 09 | 10 |
| | | | | |

ROWS

| | | | | | |
|---|---|---|---|---|---|
| A | B | C | D | E | F |
| | | | | | |